
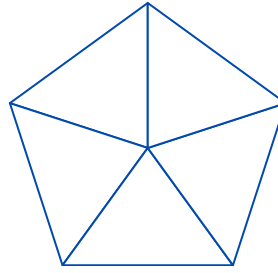


# Math Fractions


Shade the parts to represent the fraction:



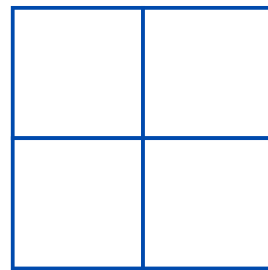
$$\frac{1}{2}$$




$$\frac{2}{5}$$




$$\frac{1}{5}$$



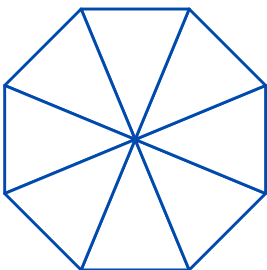
$$\frac{3}{4}$$



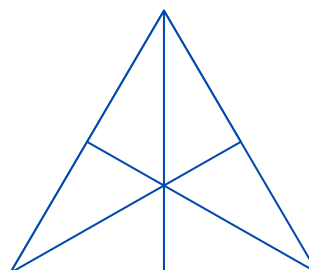
$$\frac{1}{2}$$



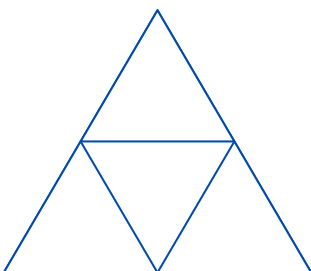
$$\frac{5}{6}$$



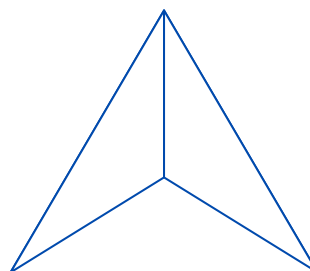
$$\frac{3}{8}$$



$$\frac{1}{6}$$



$$\frac{1}{4}$$



$$1$$