

Name: _____

Matching Time

Draw a line to match each time to each clock.






7:00

5:00

9:00

1:00

10:00



Name: _____

Matching Time

Draw a line to match each time to each clock.

6:00

8:00

12:00

11:00

4:00

