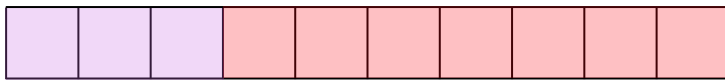


Name: \_\_\_\_\_

# Help Little Bear make 10 !




Help Little Bear figure out how many ways he can make 10. Follow the example provided and see how many ways you can make 10.



$$\textcircled{3} + \textcircled{7} = 10$$



$$\textcirc{\quad} + \textcirc{\quad} = 10$$




$$\textcirc{\quad} + \textcirc{\quad} = 10$$



$$\textcirc{\quad} + \textcirc{\quad} = 10$$



$$\textcirc{\quad} + \textcirc{\quad} = 10$$



$$\textcirc{\quad} + \textcirc{\quad} = 10$$



$$\textcirc{\quad} + \textcirc{\quad} = 10$$



$$\textcirc{\quad} + \textcirc{\quad} = 10$$



$$\textcirc{\quad} + \textcirc{\quad} = 10$$