










Name: _____

Date: _____

LET'S COUNT SHAPES!

Count and write your answers in the chart below



	<input data-bbox="370 1713 487 1822" type="text"/>		<input data-bbox="678 1713 795 1822" type="text"/>		<input data-bbox="987 1713 1104 1822" type="text"/>		<input data-bbox="1295 1713 1412 1822" type="text"/>
	<input data-bbox="370 1885 487 1990" type="text"/>		<input data-bbox="678 1885 795 1990" type="text"/>		<input data-bbox="987 1885 1104 1990" type="text"/>		<input data-bbox="1295 1885 1412 1990" type="text"/>