



Name: \_\_\_\_\_ Date: \_\_\_\_\_

# Portion


Directions: Find the fraction for the colored part and encircle it.




$\frac{3}{4}$     $\frac{3}{10}$     $\frac{3}{9}$



$\frac{2}{3}$     $\frac{2}{10}$     $\frac{2}{9}$



$\frac{1}{3}$     $\frac{8}{10}$     $\frac{7}{10}$



$\frac{1}{5}$     $\frac{1}{10}$     $\frac{1}{3}$