



Name: \_\_\_\_\_ Date: \_\_\_\_\_

# Portion

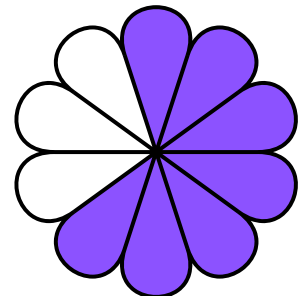
Directions: Find the fraction for the colored part and encircle it.




$5/10$     $1/10$     $4/10$



$5/6$     $1/5$     $5/10$



$7/10$     $2/10$     $6/10$



$8/9$     $9/10$     $8/10$