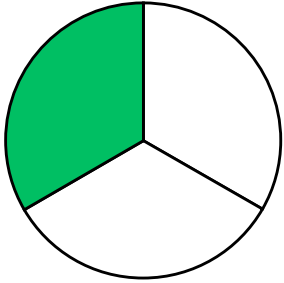


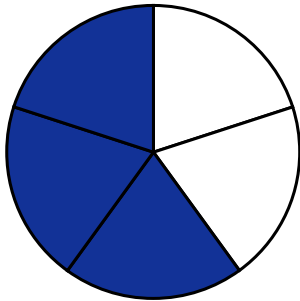
Name: _____ Date: _____

Portion

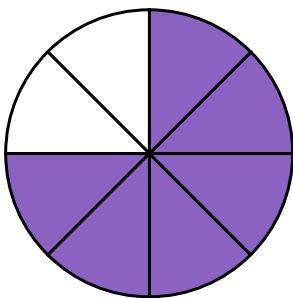
Directions: Find the fraction for the colored part and encircle it.



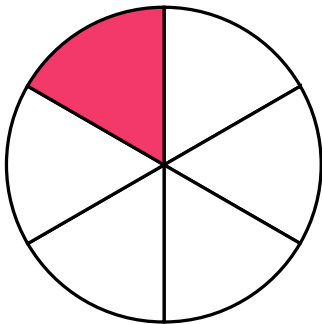
$\frac{2}{3}$ $\frac{1}{3}$ $\frac{1}{5}$



$\frac{2}{3}$ $\frac{3}{5}$ $\frac{1}{4}$



$\frac{6}{8}$ $\frac{5}{8}$ $\frac{7}{8}$



$\frac{1}{3}$ $\frac{1}{7}$ $\frac{1}{6}$