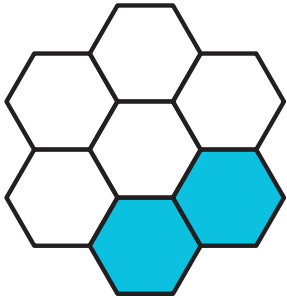



Name: _____ Date: _____

Portion

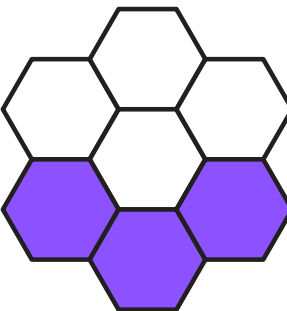
Directions: Find the fraction for the colored part and encircle it.




$2/7$ $4/7$ $5/7$



$1/8$ $1/9$ $6/7$



$2/3$ $3/7$ $4/7$



$6/7$ $4/7$ $5/7$