


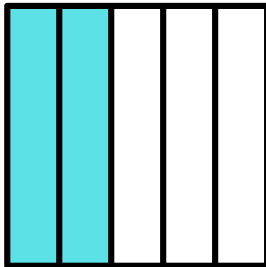
Name: _____ Date: _____

Portion


Directions: Find the fraction for the colored part and encircle it.




$\frac{2}{6}$ $\frac{1}{6}$ $\frac{3}{6}$



$\frac{1}{5}$ $\frac{2}{5}$ $\frac{3}{5}$



$\frac{2}{5}$ $\frac{3}{5}$ $\frac{4}{5}$



$\frac{1}{3}$ $\frac{2}{3}$ $\frac{1}{2}$