


Name: _____

Date: _____

COUNT & CHOOSE THE SHAPE!

Directions: Look at each shape and count how many sides it has then write it in the star. Then, choose the correct shape name and circle it.




Sides: _____

TRIANGLE

SQUARE

CIRCLE




Sides: _____

RECTANGLE

TRIANGLE

OVAL

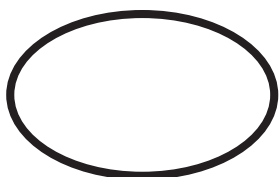


Sides: _____

CIRCLE

PENTAGON

SQUARE



Sides: _____

DIAMOND

CIRCLE

OVAL



Sides: _____

PENTAGON

DIAMOND

RECTANGLE