




# SHOPPING LIST



How many items can you purchase with \$20? List and tally the total:



\$3.00



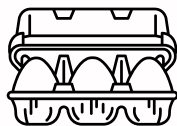
\$3.50




\$4.00



\$4.50



\$6.00



\$4.20



\$5.10



\$2.80

Total number of items:

Tally:

Total cost:



\$3.60



\$2.90



\$4.50



\$1.30



\$0.90



\$5.00



\$4.00

Total number of items:

Tally:

Total cost: