


Name: _____


Date: _____

Love Fruits


Directions: Count the fruits in each group. Read the problem and then combine the groups to find the answer.




$$4 + 3 = \underline{\hspace{2cm}}$$




$$5 + 5 = \underline{\hspace{2cm}}$$




$$5 + 4 = \underline{\hspace{2cm}}$$



$$4 + 4 = \underline{\hspace{2cm}}$$



$$5 + 3 = \underline{\hspace{2cm}}$$



$$6 + 4 = \underline{\hspace{2cm}}$$