


Name: _____


Date: _____

Love Insects


Directions: Count the insects in each group. Read the problem and then combine the groups to find the answer.




$$3 + 3 = \underline{\hspace{2cm}}$$



$$4 + 3 = \underline{\hspace{2cm}}$$




$$4 + 2 = \underline{\hspace{2cm}}$$



$$6 + 4 = \underline{\hspace{2cm}}$$



$$1 + 0 = \underline{\hspace{2cm}}$$




$$3 + 1 = \underline{\hspace{2cm}}$$

Name: _____


Date: _____

Love Insects


Directions: Count the insects in each group. Read the problem and then combine the groups to find the answer.




$$3 + 2 = \underline{\hspace{2cm}}$$




$$1 + 1 = \underline{\hspace{2cm}}$$




$$2 + 2 = \underline{\hspace{2cm}}$$



$$1 + 2 = \underline{\hspace{2cm}}$$



$$1 + 0 = \underline{\hspace{2cm}}$$



$$3 + 1 = \underline{\hspace{2cm}}$$