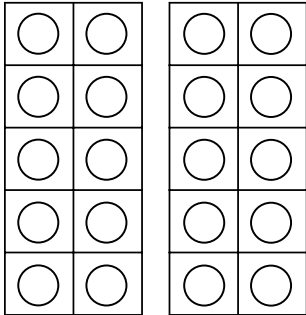


Add to 20


Make your own!



20	

$$\square + \square = \square$$

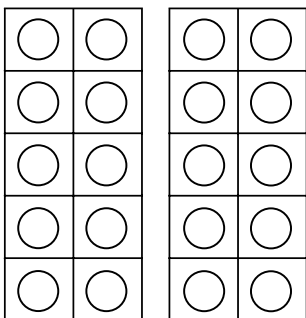
$$\square - \square = \square$$



20	

$$\square + \square = \square$$


$$\square - \square = \square$$



20	

$$\square + \square = \square$$

$$\square - \square = \square$$



20	

$$\square + \square = \square$$

$$\square - \square = \square$$