


Name: _____

Date: _____

3D Shapes

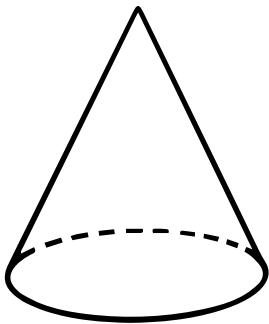
Directions: Look at the pictures on the left. Draw a line to match each figure to its name on the right side.



•

•

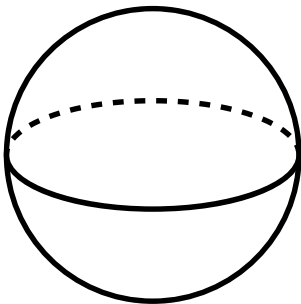
cone



•

•

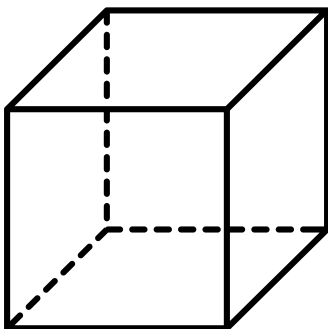
sphere



•

•

cylinder



•

•

cube