


What Time Is It?

Look at the clock. What time is it? Color in the bubble next to the correct answer.

1.




11:30 ☐

3:00 ☐

11:00 ☐

9:00 ☐

2.




8:00 ☐

3:45 ☐

8:30 ☐

2:00 ☐

3.




11:45 ☐

11:30 ☐

5:45 ☐

11:00 ☐

4.



3:00 ☐

5:00 ☐

7:00 ☐

1:30 ☐

5.




1:15 ☐

3:00 ☐

1:00 ☐

6:00 ☐

6.



6:15 ☐

1:30 ☐

12:00 ☐

12:45 ☐

Answer Key for Worksheet 1

What Time Is It?

Correct Answers

Problem 1: 9:00

Problem 3: 11:00

Problem 5: 1:00

Problem 2: 8:00

Problem 4: 3:00


Problem 6: 12:00

Note: Students should circle the bubble next to the correct time for each clock.

What Time Is It?

Look at the clock. What time is it? Color in the bubble next to the correct answer.

1.



10:30 ☐

9:15 ☐

7:00 ☐

9:00 ☐

2.




9:00 ☐

4:00 ☐

7:00 ☐

4:45 ☐

3.




8:00 ☐

11:30 ☐

8:15 ☐

8:45 ☐

4.




6:00 ☐

1:00 ☐

9:00 ☐

8:00 ☐

5.




11:00 ☐

11:30 ☐

12:00 ☐

11:45 ☐

6.



10:00 ☐

5:00 ☐

5:30 ☐

8:00 ☐

Answer Key for Worksheet 2

What Time Is It?

Correct Answers

Problem 1: 9:00

Problem 3: 8:00

Problem 5: 11:00

Problem 2: 4:00

Problem 4: 6:00

Problem 6: 5:00

Note: Students should circle the bubble next to the correct time for each clock.

What Time Is It?

Look at the clock. What time is it? Color in the bubble next to the correct answer.

1.



8:45 ☐

8:00 ☐

3:30 ☐

11:00 ☐

2.




11:00 ☐

10:45 ☐

11:15 ☐

2:00 ☐

3.




10:00 ☐

10:15 ☐

10:30 ☐

11:45 ☐

4.




5:45 ☐

5:00 ☐

5:30 ☐

9:00 ☐

5.



12:00 ☐

11:45 ☐

7:00 ☐

11:00 ☐

6.



1:00 ☐

1:30 ☐

3:00 ☐

1:45 ☐

Answer Key for Worksheet 3

What Time Is It?

Correct Answers

Problem 1: 8:00

Problem 3: 10:00

Problem 5: 11:00

Problem 2: 2:00

Problem 4: 5:00


Problem 6: 1:00

Note: Students should circle the bubble next to the correct time for each clock.

What Time Is It?

Look at the clock. What time is it? Color in the bubble next to the correct answer.

1.




5:30 ☐

5:00 ☐

9:00 ☐

5:45 ☐

2.



7:30 ☐

7:00 ☐

10:30 ☐

4:00 ☐

3.



2:00 ☐

12:00 ☐

1:00 ☐

1:15 ☐

4.




11:00 ☐

11:30 ☐

9:15 ☐

11:45 ☐

5.




10:00 ☐

8:00 ☐

9:15 ☐

4:00 ☐

6.



7:30 ☐

9:15 ☐

12:00 ☐

9:00 ☐

Answer Key for Worksheet 4

What Time Is It?

Correct Answers

Problem 1: 5:00

Problem 3: 1:00

Problem 5: 10:00

Problem 2: 7:00

Problem 4: 11:00

Problem 6: 9:00

Note: Students should circle the bubble next to the correct time for each clock.

What Time Is It?

Look at the clock. What time is it? Color in the bubble next to the correct answer.

1.



1:00 ☐

5:15 ☐

1:15 ☐

6:00 ☐

2.



11:00 ☐

11:45 ☐

5:00 ☐

2:00 ☐

3.




2:45 ☐

8:00 ☐

11:00 ☐

2:00 ☐

4.




3:00 ☐

11:15 ☐

3:30 ☐

7:30 ☐

5.




11:00 ☐

6:30 ☐

6:00 ☐

9:00 ☐

6.



10:00 ☐

6:45 ☐

8:00 ☐

6:00 ☐

Answer Key for Worksheet 5

What Time Is It?

Correct Answers

Problem 1: 1:00

Problem 3: 2:00

Problem 5: 9:00

Problem 2: 11:00

Problem 4: 3:00

Problem 6: 6:00

Note: Students should circle the bubble next to the correct time for each clock.