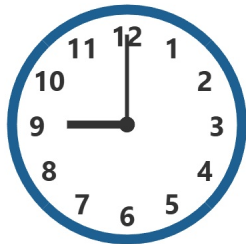


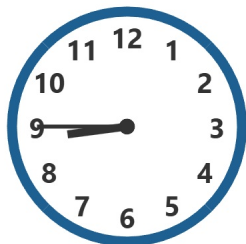
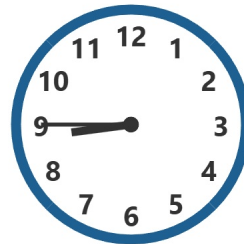

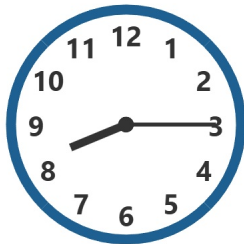


Learning to Tell Time

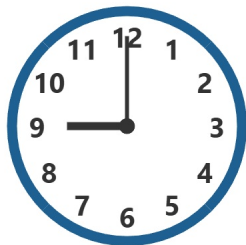
Write the time under the first set of clocks. The first one has been done for you.



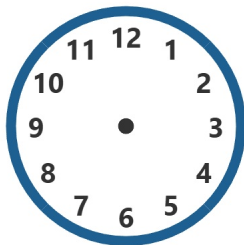
9:00



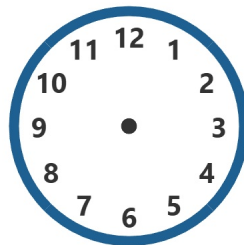
Now draw the hands on these analog clock faces to match the digital time already given. The first one has been done for you.



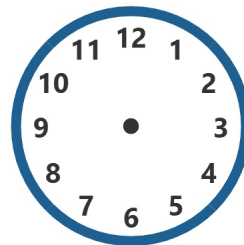
9:00



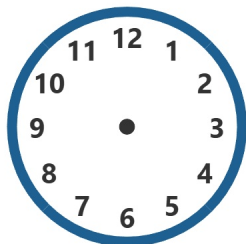
8:15



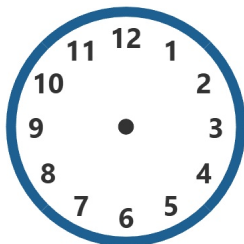
7:00



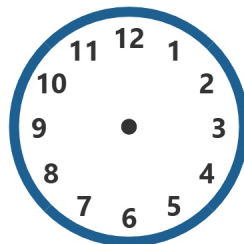
8:45



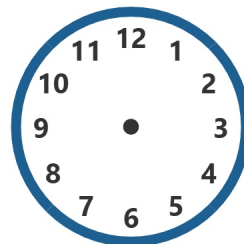
8:45



3:30



8:30



7:15

Learning to Tell Time - Answer Key

Answer Key

Section 1:

Write the time shown on each clock

1. 9:00
2. 8:15
3. 7:00
4. 8:45
5. 8:45
6. 3:30
7. 8:30
8. 7:15

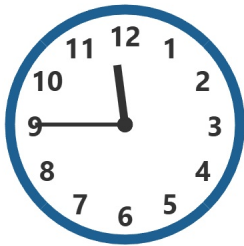
Section 2:

Draw hands to show the following times

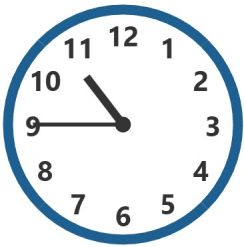
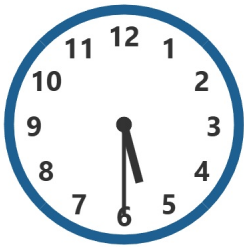


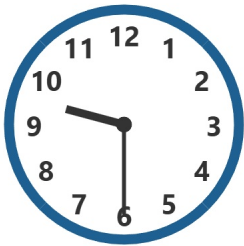
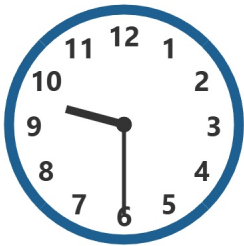
1. 9:00
2. 8:15
3. 7:00
4. 8:45
5. 8:45
6. 3:30
7. 8:30
8. 7:15

Learning to Tell Time

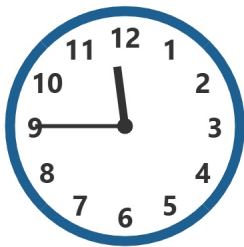
Write the time under the first set of clocks. The first one has been done for you.



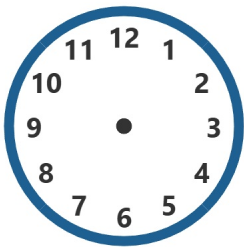
11:45



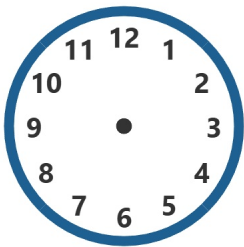
Now draw the hands on these analog clock faces to match the digital time already given. The first one has been done for you.



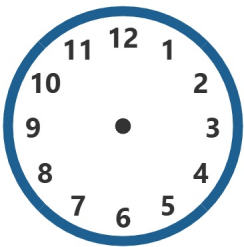
11:45



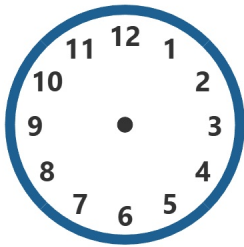
9:30



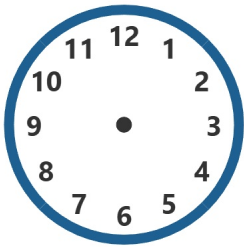
9:30



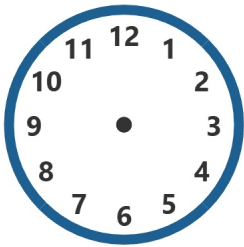
5:30



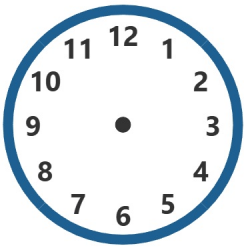
10:30



11:15



5:30



10:45

Learning to Tell Time - Answer Key

Answer Key

Section 1:

Write the time shown on each clock

1. 11:45
2. 9:30
3. 9:30
4. 5:30
5. 10:30
6. 11:15
7. 5:30
8. 10:45

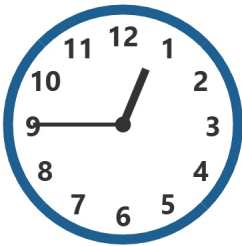
Section 2:

Draw hands to show the following times


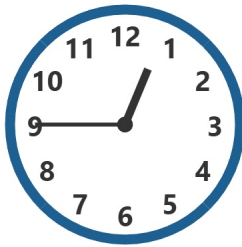




1. 11:45
2. 9:30
3. 9:30
4. 5:30
5. 10:30
6. 11:15
7. 5:30
8. 10:45

Learning to Tell Time

Write the time under the first set of clocks. The first one has been done for you.



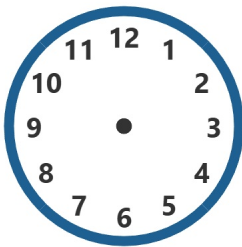
12:45



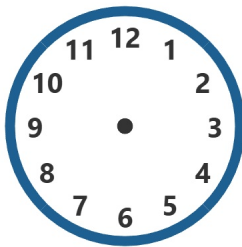
Now draw the hands on these analog clock faces to match the digital time already given. The first one has been done for you.



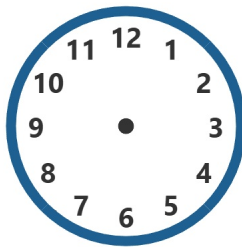
12:45



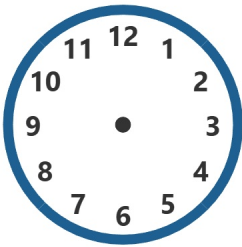
7:15



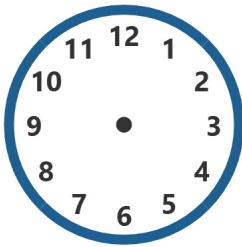
11:45



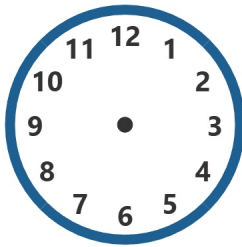
6:00



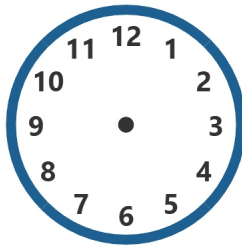
5:00



12:30



12:45



7:00

Learning to Tell Time - Answer Key

Answer Key

Section 1:

Write the time shown on each clock

1. 12:45
2. 7:15
3. 11:45
4. 6:00
5. 5:00
6. 12:30
7. 12:45
8. 7:00


Section 2:

Draw hands to show the following times



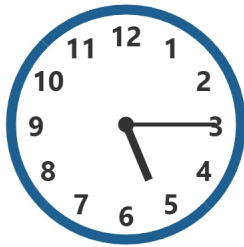
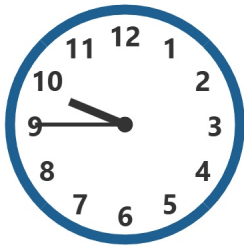
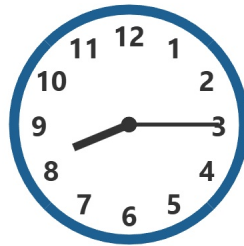
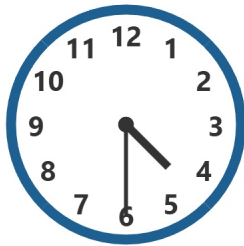
1. 12:45
2. 7:15
3. 11:45
4. 6:00
5. 5:00
6. 12:30
7. 12:45
8. 7:00

Learning to Tell Time


Write the time under the first set of clocks. The first one has been done for you.



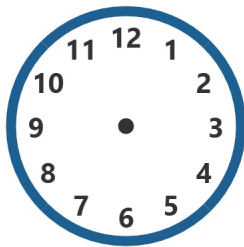
1:15



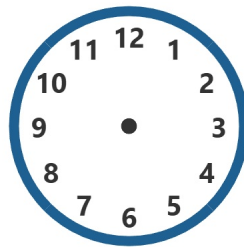
Now draw the hands on these analog clock faces to match the digital time already given. The first one has been done for you.



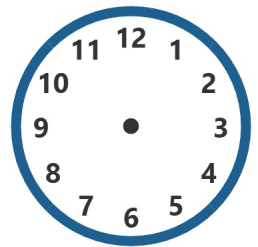
1:15



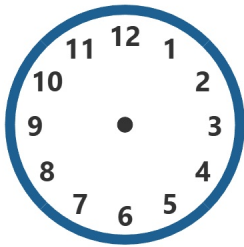
4:30



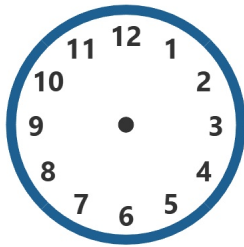
8:15



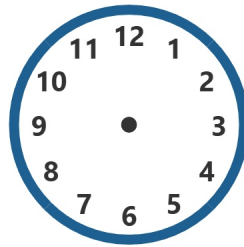
4:30



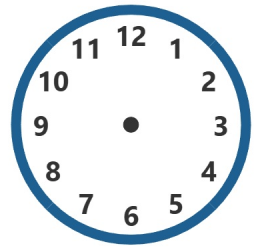
9:45



5:15



1:30



8:00

Learning to Tell Time - Answer Key

Answer Key

Section 1:

Write the time shown on each clock

1. 1:15
2. 4:30
3. 8:15
4. 4:30
5. 9:45
6. 5:15
7. 1:30
8. 8:00

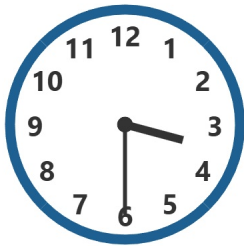
Section 2:

Draw hands to show the following times

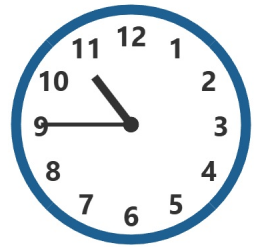
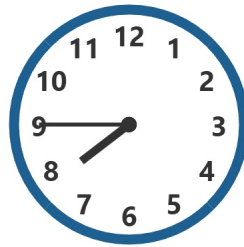
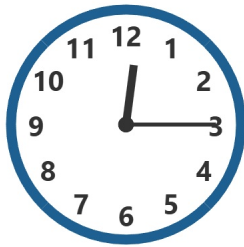
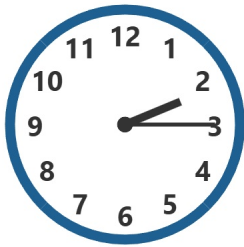
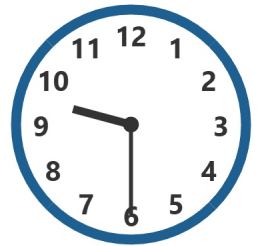
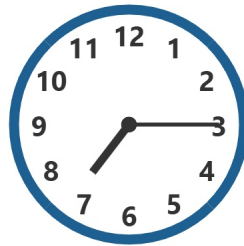
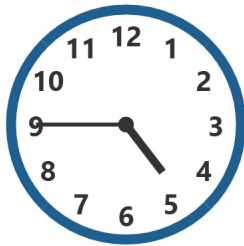
1. 1:15
2. 4:30
3. 8:15
4. 4:30
5. 9:45
6. 5:15
7. 1:30
8. 8:00

Learning to Tell Time

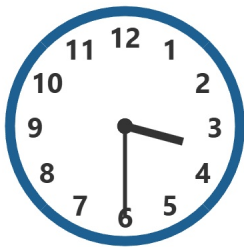
Write the time under the first set of clocks. The first one has been done for you.



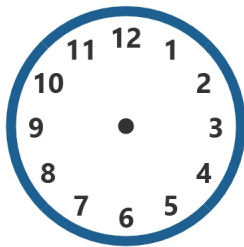
3:30



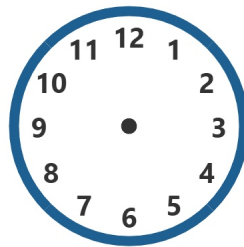
Now draw the hands on these analog clock faces to match the digital time already given. The first one has been done for you.



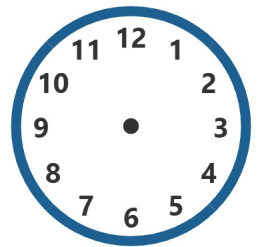
3:30



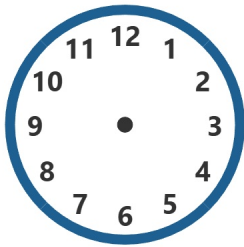
4:45



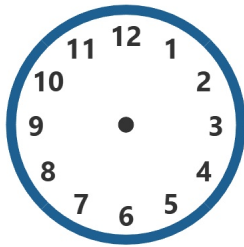
7:15



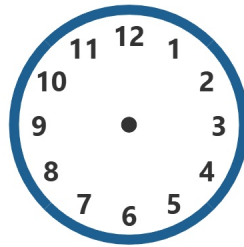
9:30



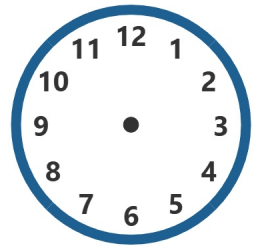
2:15



12:15



7:45



10:45

Learning to Tell Time - Answer Key

Answer Key

Section 1:

Write the time shown on each clock

1. 3:30
2. 4:45
3. 7:15
4. 9:30
5. 2:15
6. 12:15
7. 7:45
8. 10:45

Section 2:

Draw hands to show the following times

1. 3:30
2. 4:45
3. 7:15
4. 9:30
5. 2:15
6. 12:15
7. 7:45
8. 10:45